



UNIVERSITY OF CAMBRIDGE INTERNATIONAL EXAMINATIONS
General Certificate of Education Advanced Subsidiary Level and Advanced Level

GEOGRAPHY

9696/32

Paper 3 Advanced Human Options

May/June 2011

INSERT

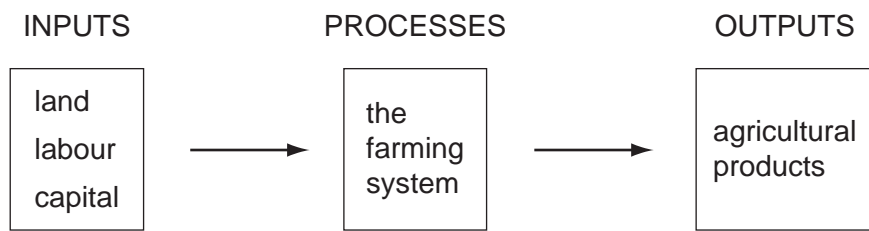
1 hour 30 minutes

READ THESE INSTRUCTIONS FIRST

This Insert contains all the Figures and the Photographs referred to in the questions.

This document consists of **5** printed pages and **3** blank pages.



Fig. 1 for Question 1**Simple agricultural system**

3

Photographs A and B for Question 3**Marina Barrage, Singapore, 2010****The building's rooftop solar park****Photograph A****Rubbish bin near the entrance****Photograph B**

Fig. 2 for Question 6

A life cycle model of the development of resorts and tourist destinations

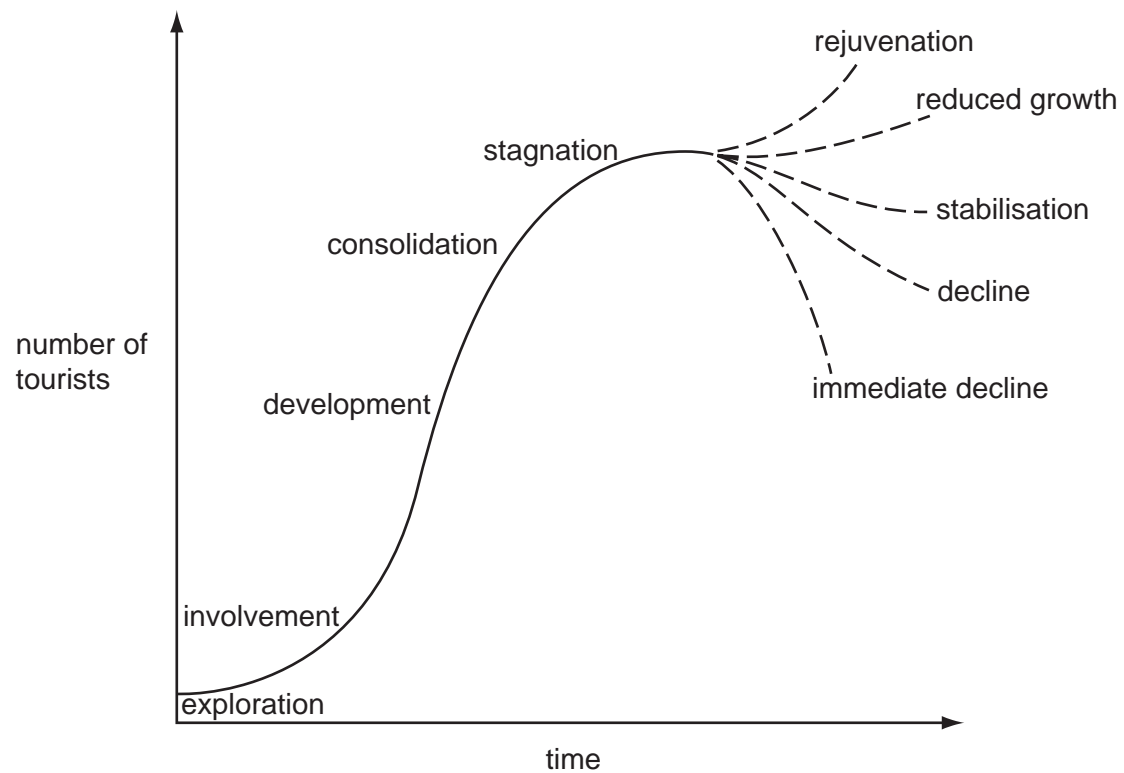
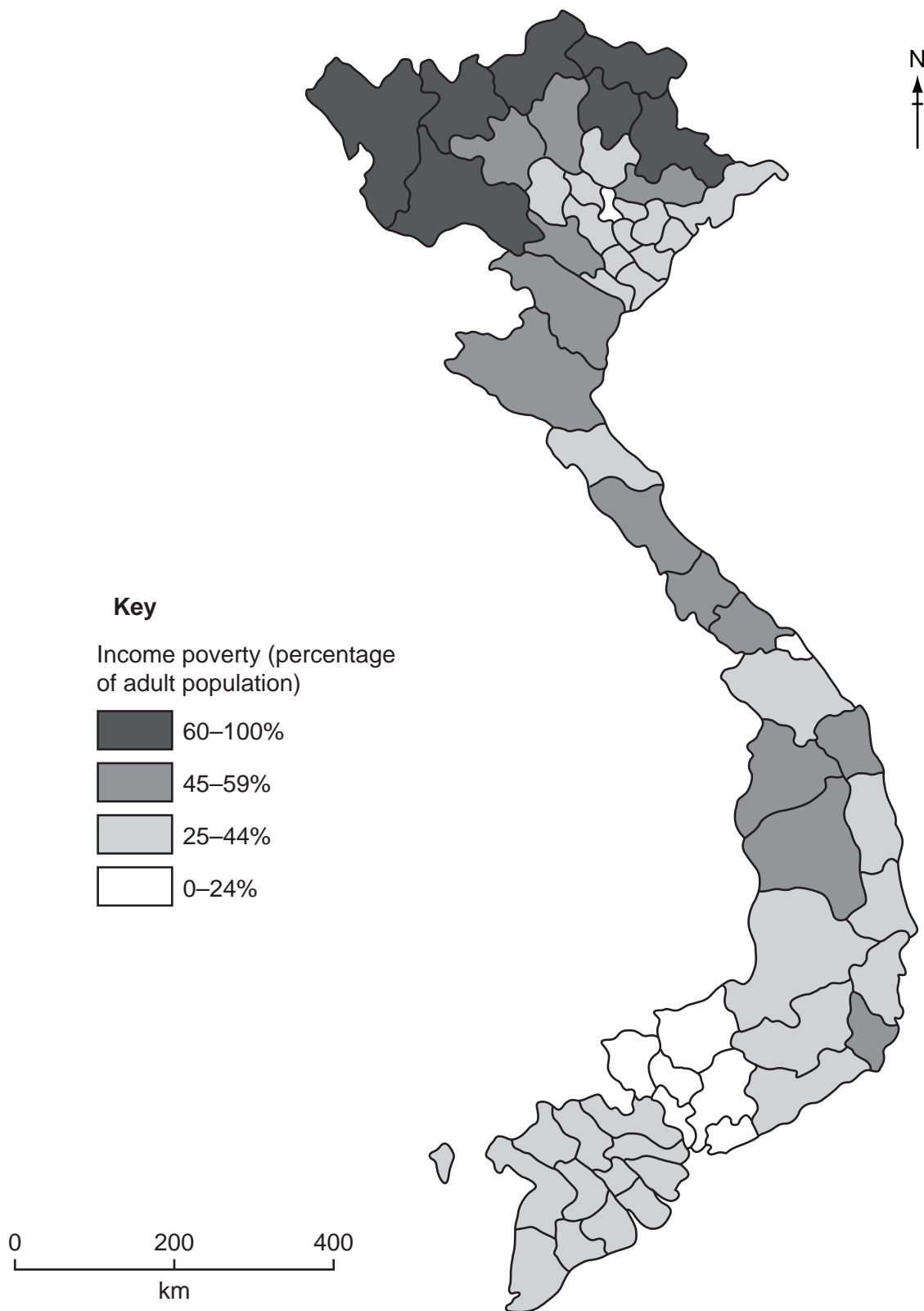


Fig. 3 for Question 8

Income poverty* in Vietnam, by province, 2008



* Income poverty means the percentage of adults who cannot afford the recommended minimum daily amount of food.

BLANK PAGE

BLANK PAGE

BLANK PAGE

Permission to reproduce items where third-party owned material protected by copyright is included has been sought and cleared where possible. Every reasonable effort has been made by the publisher (UCLES) to trace copyright holders, but if any items requiring clearance have unwittingly been included, the publisher will be pleased to make amends at the earliest possible opportunity.

University of Cambridge International Examinations is part of the Cambridge Assessment Group. Cambridge Assessment is the brand name of University of Cambridge Local Examinations Syndicate (UCLES), which is itself a department of the University of Cambridge.